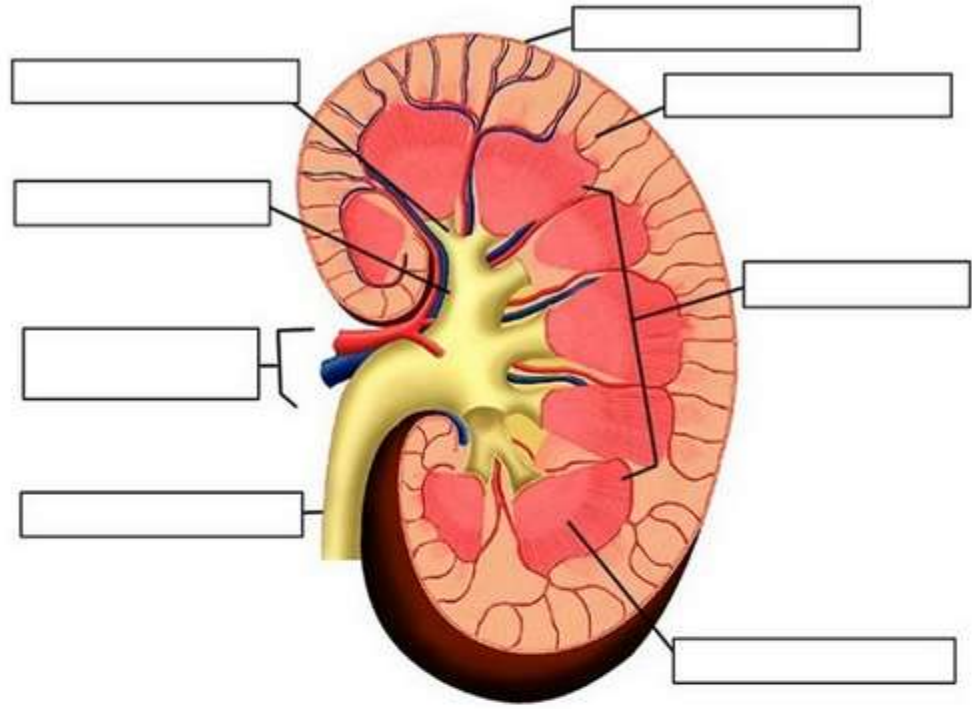
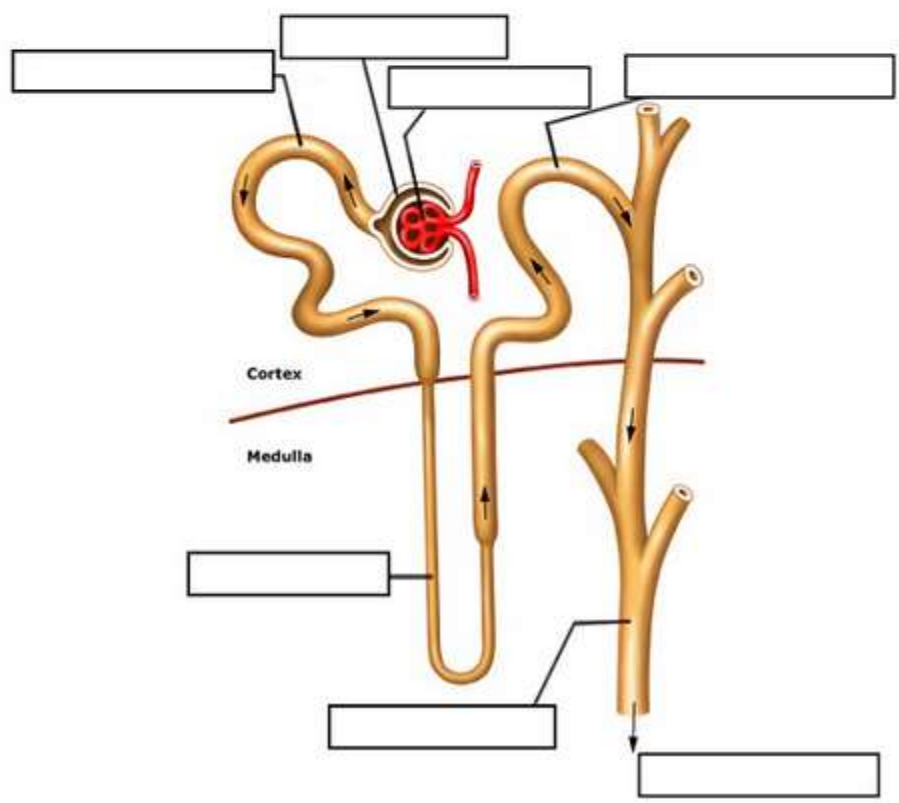


Kidney and Nephron Labeling



Label the Nephron

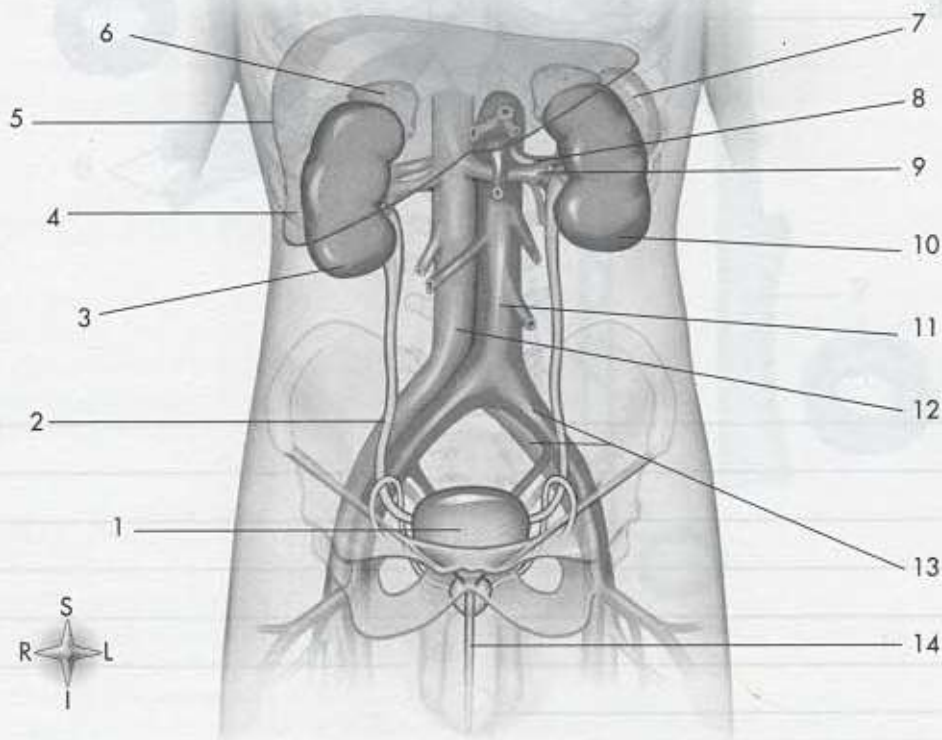


Matching

Select the most correct answer from column B for each statement in column A. (Only one answer is correct.)

- | Column A | Column B |
|-----------------------------------|--|
| ___ 11. Uremia | A. Urinary bladder infection |
| ___ 12. Nephrons | B. Triangular divisions of medulla of kidney |
| ___ 13. Renal tubule | C. Microscopic units of kidney |
| ___ 14. Juxtaglomerular apparatus | D. Blood pressure regulation |
| ___ 15. Secretion | E. Uremic poisoning |
| ___ 16. CAPD | F. Loop of Henle |
| ___ 17. Cystitis | G. Relaxation of internal sphincter |
| ___ 18. Emptying reflex | H. Renal failure |
| ___ 19. Calyces | I. Divisions of renal pelvis |
| ___ 20. Pyramids | J. Hydrogen and potassium ions |

URINARY SYSTEM



- | | |
|----------|-----------|
| 1. _____ | 8. _____ |
| 2. _____ | 9. _____ |
| 3. _____ | 10. _____ |
| 4. _____ | 11. _____ |
| 5. _____ | 12. _____ |
| 6. _____ | 13. _____ |
| 7. _____ | 14. _____ |